
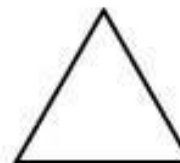


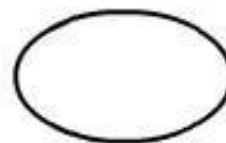


<b>SUMMATIVE ASSIGNMENT -2    2025- 26</b>	
<b>Grade – NURSERY</b>	<b>Subject- MATHS</b>

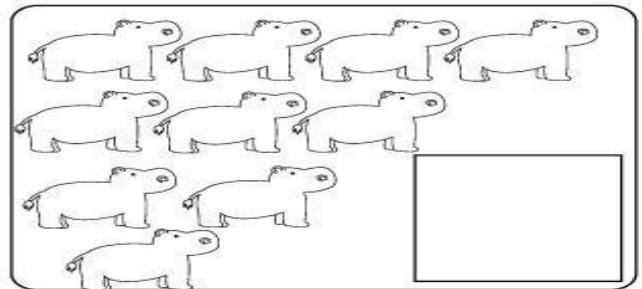
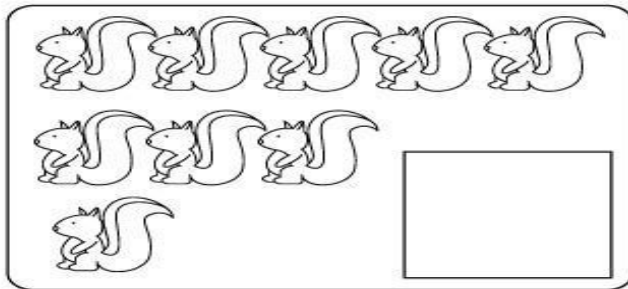

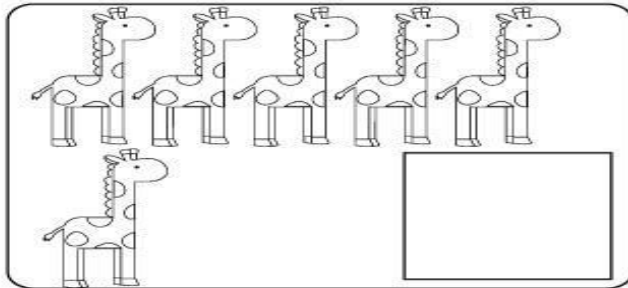


## 1. Write numbers from 1 to 20

[illegible][illegible][illegible]

2. Draw a line from each shape on the left to the matching shape on the right side of the page.



3. Count the number of animals in each box and write the total number inside the square box.



4. Write before, after and between.

Before

← 

3

← 

6

← 

2

← 

8

← 

10

← 

5

Between

1

3

6

8

8

10

3

5

7

9

4

6

After

5

 →

9

 →

7

 →

2

 →

8

 →

1

 →

5. Write the missing numbers

